


Directions for questions (1 – 5): Which of the following diagrams best represents the relationship among given words.



a



b



c



d

Q1. Woman, Teacher, Student

a) a

b) b

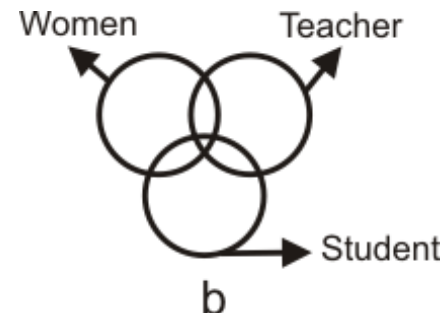
c) c

d) d

Answer: (b)

Some women are teachers. Some women are students. Some teachers are students. Some women teachers are students.


This can be expressed as given in option (b).



Directions for questions (1 – 5): Which of the following diagrams best represents the relationship among given words.



a



b



c



d

Q2. Elephant, Wolf, Animal

a) a

b) b

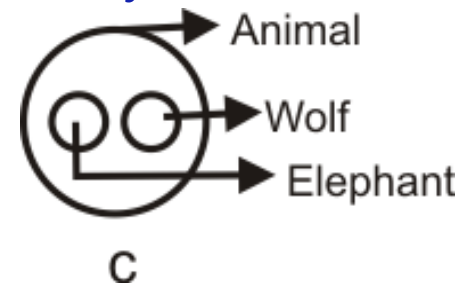
c) c

d) d

Answer: (c)

Elephant and wolf both belong to the group of animals but they both are entirely different.


This can be expressed as given in option (c).



Directions for questions (1 – 3): Which of the following diagrams best represents the relationship among given words.



a



b



c



d

Q3. Red, Green, Colour

a) a

b) b

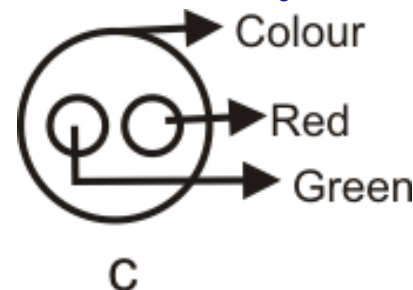
c) c

d) d

Answer: (c)

Red and green both belong to the group of colours but they both are entirely different.


This can be expressed as given in option (c).




Directions for questions (4 – 10): Which of the following diagrams best represents the relationship among given words.




a



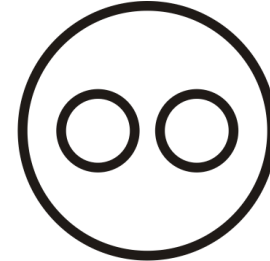
b



c



d



e

Q4. Universe, Earth, Europe

a) a

b) b

c) c

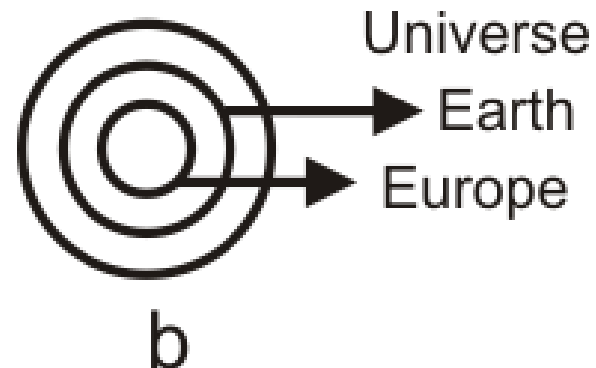
d) d

e) e

Answer: (b)

The universe contains Earth and Earth contains Europe.


This relation can be expressed as given in option (b).




Directions for questions (4 – 10): Which of the following diagrams best represents the relationship among given words.




a



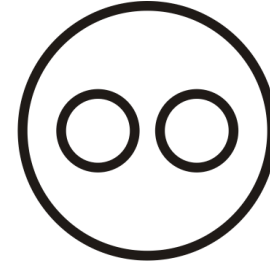
b



c



d



e

Q5. Picture, TV, Radio

a) a

b) b

c) c

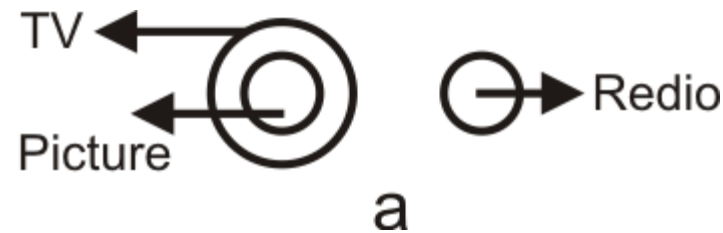
d) d

e) e

Answer: (a)

The picture is there on TV while the radio is not related to both of them.


This can be expressed as given in option (a).




Directions for questions (4 – 10): Which of the following diagrams best represents the relationship among given words.




a



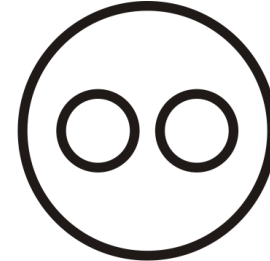
b



c



d



e

Q6. Living beings, Animals, Men

a) a

b) b

c) c

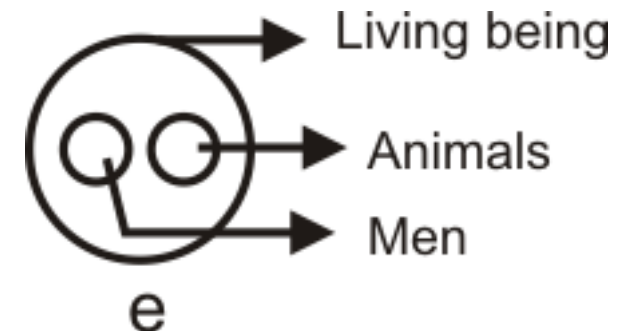
d) d

e) e

Answer: (e)

Men and animals are entirely different but they both are living beings.


This can be expressed as given in option (e).




Directions for questions (4 – 10): Which of the following diagrams best represents the relationship among given words.




a



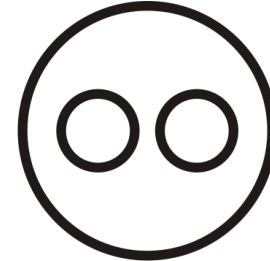
b



c



d



e

Q7. Radio, TV, Cinema hall

a) a

b) b

c) c

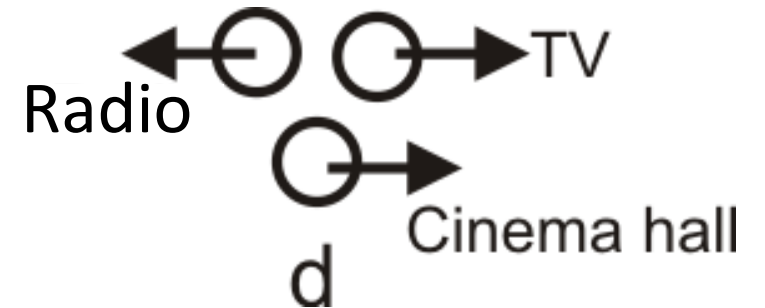
d) d

e) e

Answer: (d)

Radio, TV and cinema hall are entirely different from one another.


This can be expressed as given in option (d).




Directions for questions (4 – 10): Which of the following diagrams best represents the relationship among given words.




a



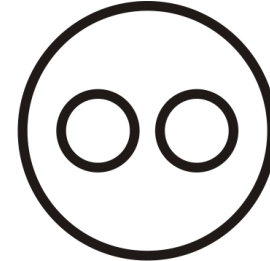
b



c



d



e

Q8. Residence, Resident, Road

a) a

b) b

c) c

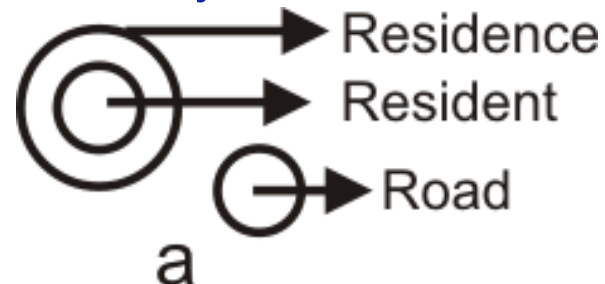
d) d

e) e

Answer: (a)

The resident lives in the residence while the road is an entirely different form of resident and residence.

This can be expressed as given in option (a).




Directions for questions (4 – 10): Which of the following diagrams best represents the relationship among given words.




a



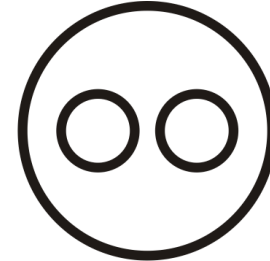
b



c



d



e

Q9. Copy, Stationery, Car

a) a

b) b

c) c

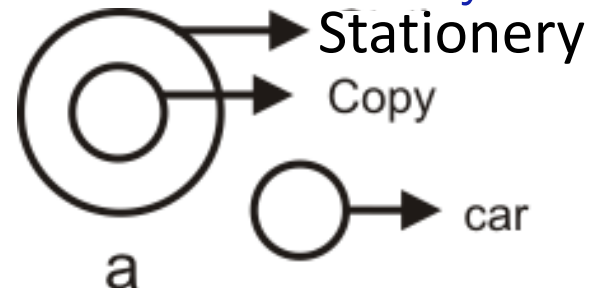
d) d

e) e

Answer: (a)

Copy completely belongs to the group of stationery while the car is entirely different.


This can be expressed as given in option (a).



Directions for questions (4 – 10): Which of the following diagrams best represents the relationship among given words.




a



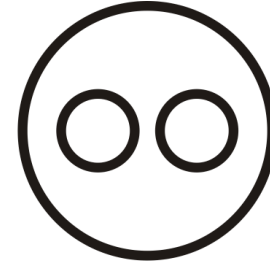
b



c



d



e

Q10. Coal mines, Factory, Field

a) a

b) b

c) c

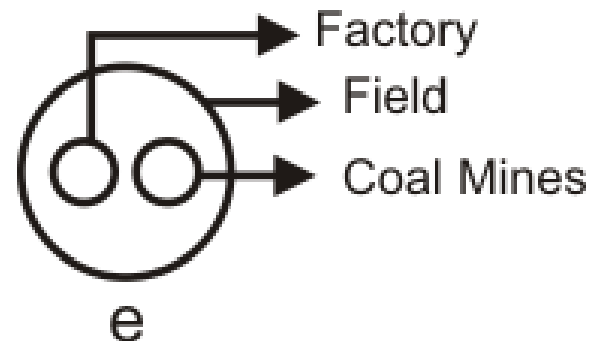
d) d

e) e

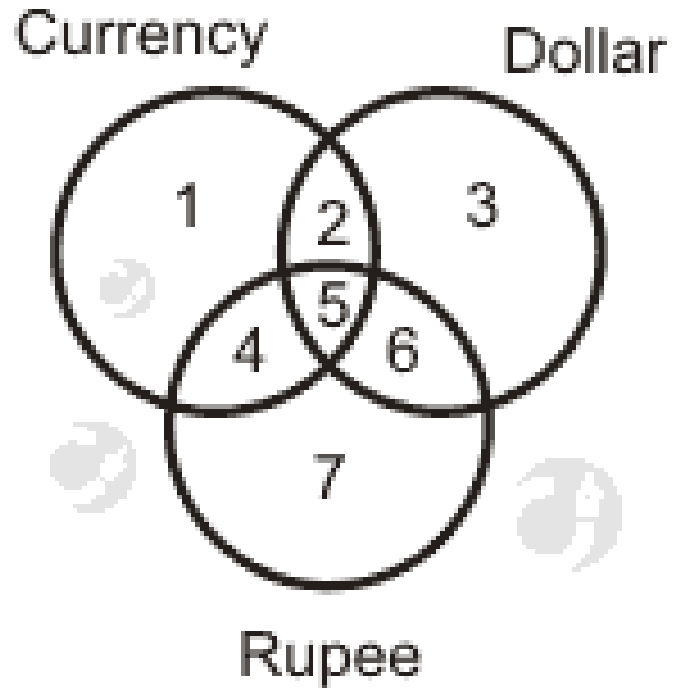
Answer: (e)

Both coal mines and factory are located in the field.

This can be expressed as given in option (e).



Q11. See the given diagram and then find out the youth who does the job but not educated.



a) 5

b) 4

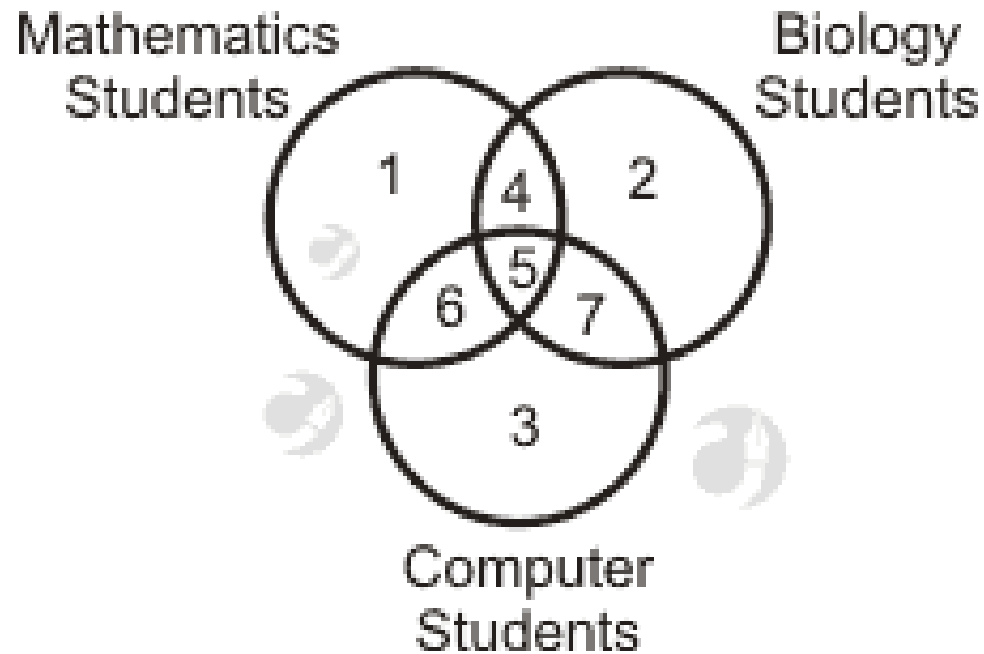
c) 6

d) 7

Answer: (b)

The region 4 is common to youth and job but not educated.

Q12. Identify the region that represents students who study biology and computer but not Mathematics.



a) 6

b) 2

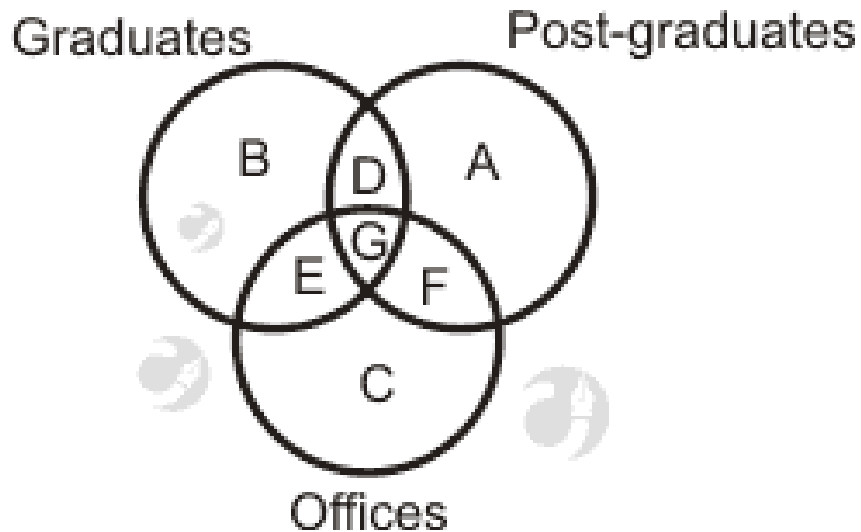
c) 7

d) 4

Answer: (c)

The region which represents students who study biology and computer but not Mathematics is '7'.

Q13. Given below are three figures which represent graduates, postgraduates, officers. Which part represents all the officers who are graduates and postgraduates?



a) G

b) D

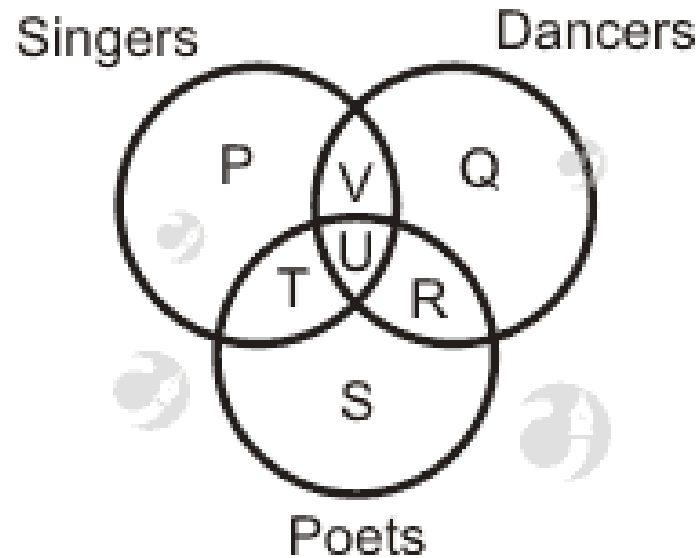
c) B

d) C

Answer: (a)

The part of a figure representing officers, who are graduates and postgraduates is common to all three circles i.e., G.

Q14. The diagram represents the students who are singers, dancers and poets. Study the above diagram and identify the region which represents the students who are both poets and singers but not dancers.



a) $P + T + S$

b) T

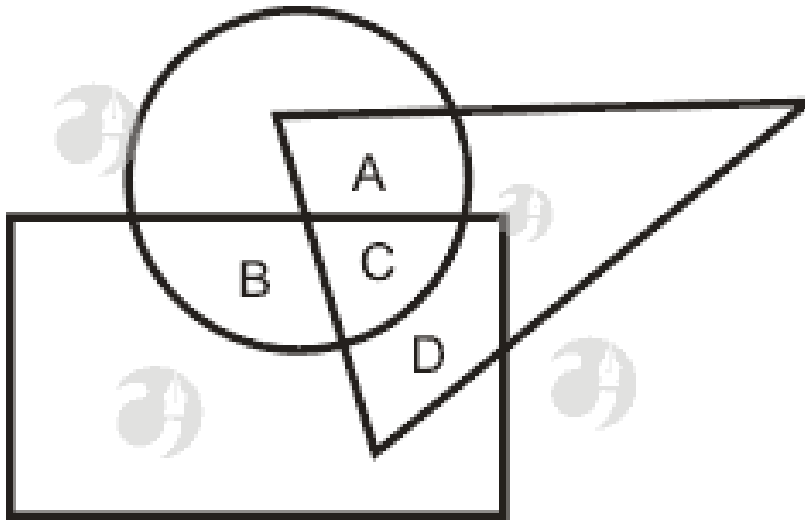
c) $T + U + R + S$

d) $P + T + U + S$

Answer: (b)

Region T is common to both singers and poets but not dancers.

Q15. In the following diagram, the triangle represents doctors, the circle represents players and the rectangle represents singers. Which region represents doctors who are singers but not players?



a) A

b) B

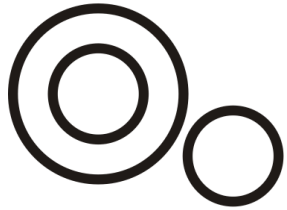
c) C

d) D

Answer: (d)

Letter D represents those people who are doctors and singers but not players as it is common to triangle and rectangle but not a circle.


Directions for questions (16 – 18): Which of the following diagrams best represents the relationship among given words.




a



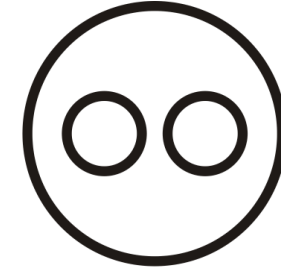
b



c



d



e

Q16. Clothes, Sari, Dhoti

a) a

b) b

c) c

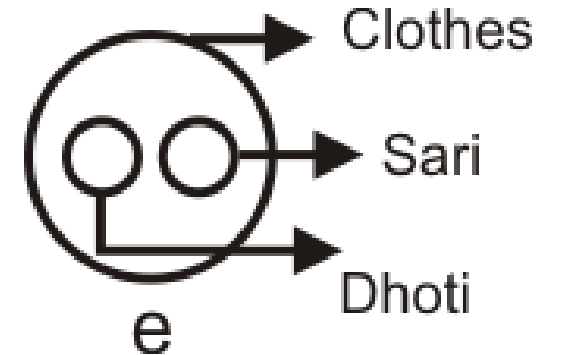
d) d

e) e

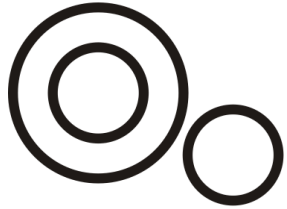
Answer: (e)

Dhoti and sari are entirely different but both belong to the group of clothes.


This can be expressed as given in option (e).




Directions for questions (16 – 18): Which of the following diagrams best represents the relationship among given words.




a



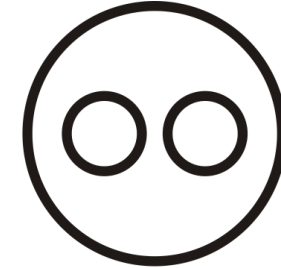
b



c



d



e

Q17. Chapter, Book, Topic

a) a

b) b

c) c

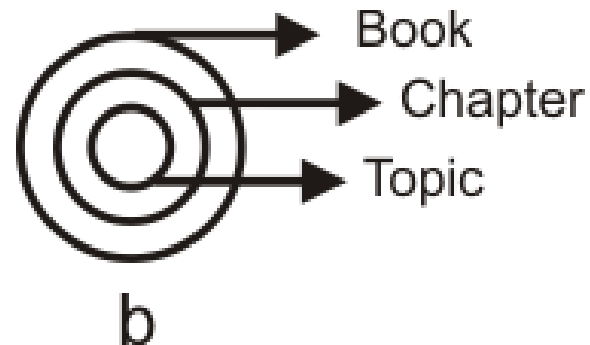
d) d

e) e

Answer: (b)

A book has chapters and a chapter has topics.


This can be expressed as given in option (b).




Directions for questions (16 – 18): Which of the following diagrams best represents the relationship among given words.




a



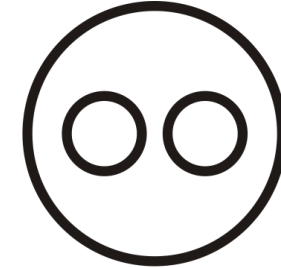
b



c



d



e

Q18. Boys, Class, Girls

a) a

b) b

c) c

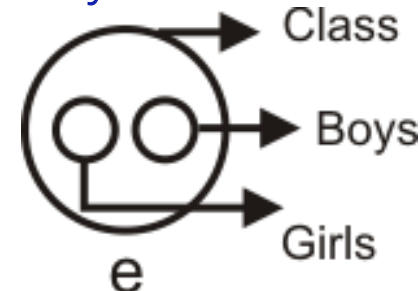
d) d

e) e

Answer: (e)

A class has both boys and girls but boys and girls are entirely different from each other.

This can be expressed as a given option (e).

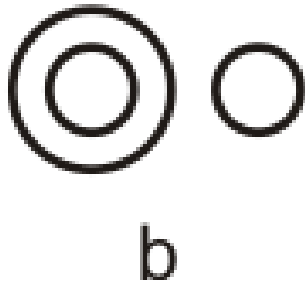


Q19. Identify the diagram that best represents the relationship between the classes given below.

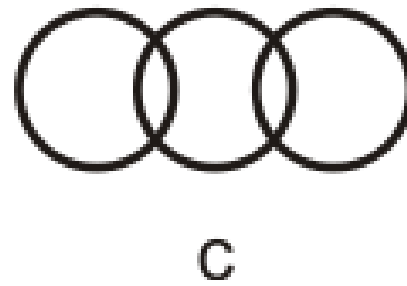
Liquids, Milk, River water



a) a



b) b



c) c

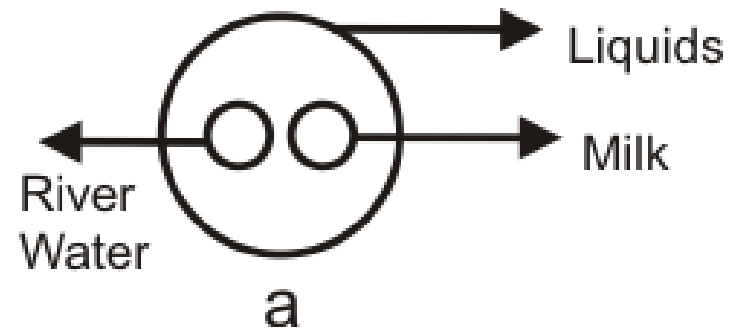


d) d

Answer: (a)

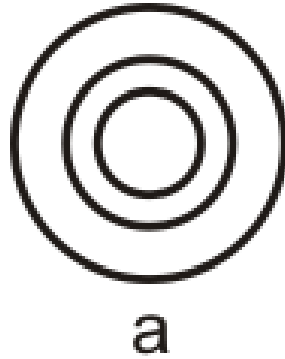
'Milk' and 'River water' both are liquids.

This can be expressed as given in option (a).

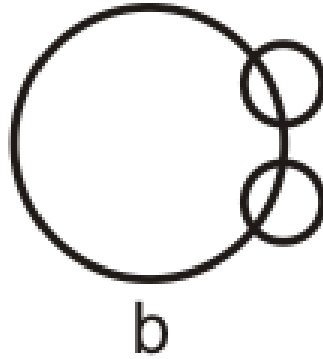


Q20. Which one of the following diagrams best represents the relationship between?

Snake, Lizard and Reptiles



a) a



b) b



c) c

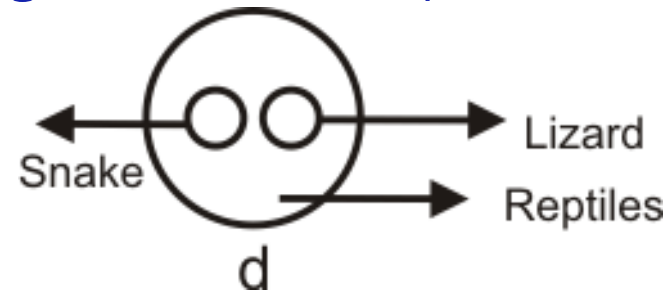


d) d

Answer: (d)

Snake and lizard are entirely different but both belong to the class of reptiles.

This can be expressed as given in option (d).



Q21. Which of the following diagrams represents the correct relationship between?

Herbivorous, Tigers and Animals



a

a) a



b

b) b



c

c) c



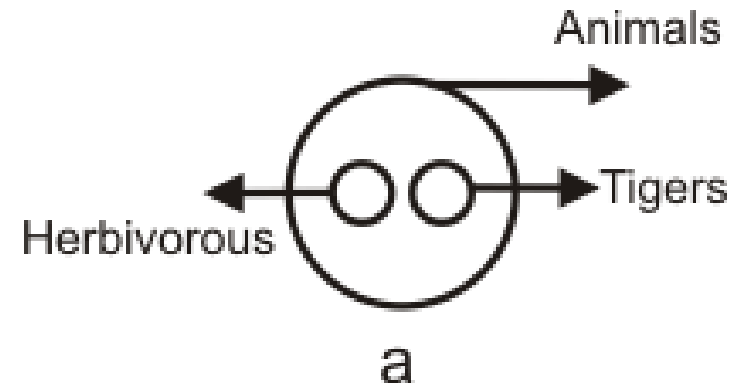
d

d) d

Answer: (a)

Tigers are animals but not herbivorous.

This can be expressed as given in option (a).




Q22. Choose the correct relationship depicting diagram for?

Smokers, Lawyers, Non-Smokers



a

a) a



b

b) b



c

c) c



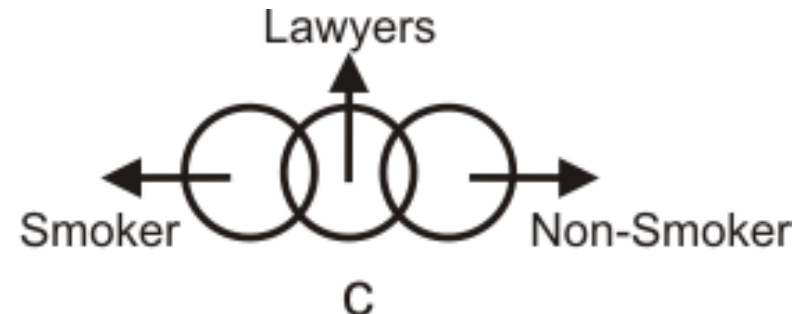
d

d) d

Answer: (c)

Some lawyers may be smokers while some lawyers may be non - smokers. But all the smokers and non - smokers may not be lawyers.

This can be expressed as given in option (c).



Q23. Which one of the following diagrams best depicts the relationship between?

Earth, Sea and Sun



a

a) a



b

b) b



c

c) c



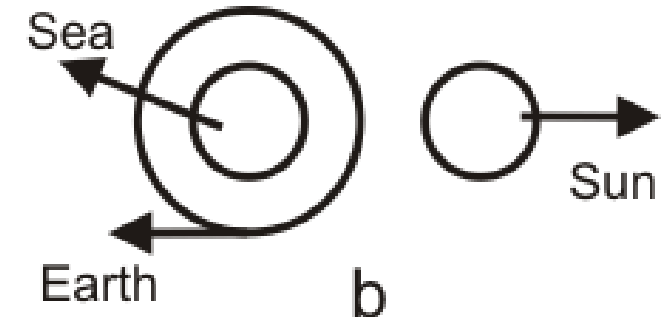
d

d) d

Answer: (b)

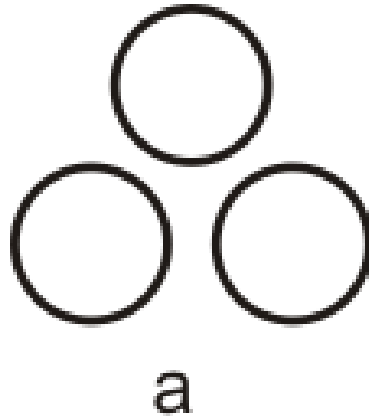
Sea is a part of the Earth but the sun is present outside the earth.

This relation can be expressed as given in option (b).




Q24. Which one of the following diagrams represents the correct relationship among?

Teachers, Educated, Employed



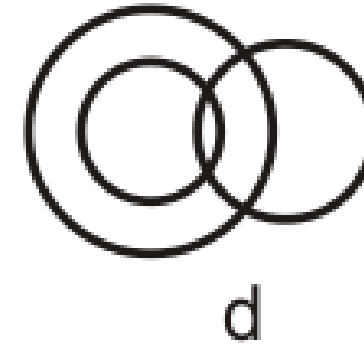
a) a



b) b



c) c

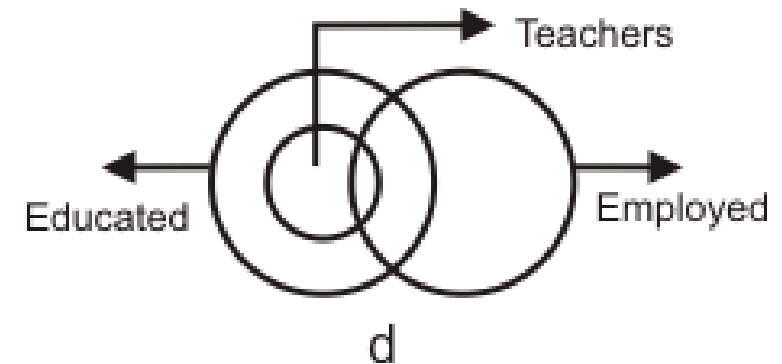


d) d

Answer: (d)

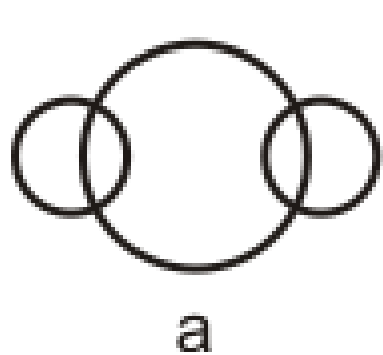
All the teachers are educated but some are employed.

This can be expressed as given in option (d).



Q25. Which of the following diagrams represents the relation between?

Currency, Rupee and Dollar



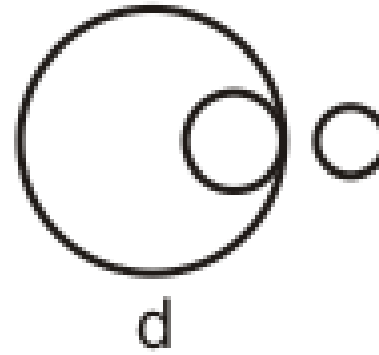
a) a



b) b



c) c



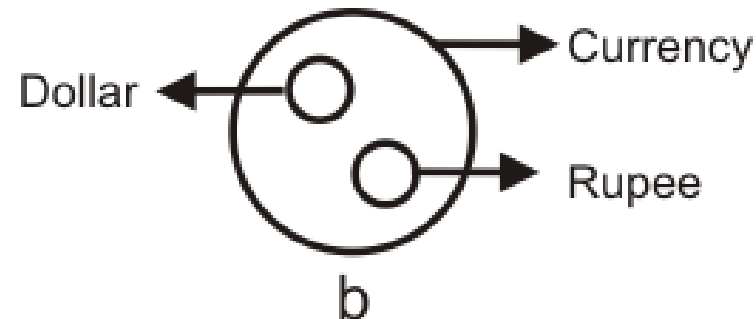
d) d



Answer: (b)

Rupee and dollar are entirely different from each other but both come under the category of currency.

This can be expressed as given in option (b).



20,000+ General Intelligence & Reasoning MCQs from various topics for SSC CGL Tier-1 Examination

Get Online Practice for

**20,000+ General Awareness
MCQs**

**10,000+ General English
MCQs**

**10,000+ Quantitative
Aptitude MCQs**

**20,000+ Verbal & Non Verbal
Reasoning MCQs**

Also With

**Free Practice test, Online Quiz &
Mock Test Series.**