

DIRECTION & DISTANCE SENSE TEST BASED VERBAL REASONING PRACTICE QUESTIONS AND ANSWERS PDF WITH EXPLANATION

For All Competitive SSC, Bank, IBPS, UPSC, Railway, IT & Other Govt. Exams

Created By [Careericons](#) Team

DIRECTIONS:

Study the informations and answer the question given below: Eight friends, A, B, C, D, E, F, G and H are sitting in a square dining table.

- i. On one side of table, only two friends can sit.
- ii. All the friends are sitting at equal distance from each other.
- iii. A is facing south. 'B' and 'F' are sitting opposite side.
- iv. 'F' is not facing in that direction in which 'A' and 'H' are facing, 'H' is facing west direction. 'D' and 'C' are both sitting at same side.
- v. 'C' is facing to the neighbour of 'H'. E is F's neighbour

Q1. In which direction is 'G' facing?

- a) West
- b) East
- c) South
- d) North

Q2. In which direction is 'F' facing ?

- a) West
- b) East
- c) South
- d) North

Q3. In which direction is 'D' facing ?

- a) West

- b) East
 - c) South
 - d) North
-

Q4. In which direction is 'B' facing ?

- a) West
- b) East
- c) South
- d) North

5000+ FREE VERBAL REASONING QUESTION BANK FOR ALL SSC, UPSC, BANK, RAILWAY EXAMS

[Free Practice MCQs »](#)

[Download More PDF »](#)

[Free Online Quiz »](#)

Q5. From his house, Lokesh went 15 kms to the North. Then he turned West and covered 10 kms. Then, he turned South and covered 5 kms. Finally, turning to East, he covered 10 kms. In which direction is he from his house ?

- a) West
 - b) South
 - c) North
 - d) East
-

Q6. Roy walks 2 km to East, then turns North-West and walks 3 km. Then he turns South and walks 5 km. Then again he turns West and walks 2 km. Finally he turns North and walks 6 km. In which direction, is he from the starting point?

- a) North – West
 - b) South – East
 - c) South – West
 - d) North – East
-

Q7. If Mohan sees the rising sun behind the temple and the setting sun behind the railway station from his house, what is the direction of the temple from the railway station?

- a) East
 - b) North
 - c) South
 - d) West
-

Q8. If South-East is called East, South-West is called South and in the same way directions are changing. Then what would we say the North direction?

- a) South-East
 - b) North-East
 - c) North-West
 - d) South-West
-

Q9. Seeta starts from a point, walks 2 km towards north, turns towards her right and walks 2 km, turns right again and walks. What is the direction she is facing now ?

- a) South
 - b) West
 - c) East
 - d) North
-

Q10. Rahim rode on his bicycle from his house towards the market for 300 m. He was moving southwest. Then he turned left at an angle of 135° and rode for 100 m to visit a friend. In which direction is Rahim's house located from his friend's house?

- a) West
- b) East
- c) North

d) South

Q11. A boy walks northwards. After a while he turns towards his right and a little further to his left. Finally after walking a distance of one kilometre, he turns to his left again. In which direction he is moving now ?

- a) East
 - b) South
 - c) North
 - d) West
-

Q12. One morning after sunrise, Reeta and Kavita were talking to each other face to face at Tilak Square. If Kavita's shadow was exactly to the right of Reeta, which direction Kavita was facing ?

- a) South
- b) Data inadequate
- c) East
- d) North
- e) None of these

1000+ FREE DIRECTION & DISTANCE SENSE TEST BASED QUESTIONS AND ANSWERS FOR ALL COMPETITIVE EXAMS

[Free Practice MCQs »](#)

[Download More PDF »](#)

[Free Online Quiz »](#)

Q13. A man starts from his house and walked straight for 10 metres towards North and turned left and walked 25 metres. He then turned right and walked 5 metres and again turned right and walked 25 metres. Which direction is he facing now ?

- a) South
 - b) East
 - c) North
 - d) West
-

Q14. If a person moves 4 km towards west, then turns right and moves 3 km and then turns right and moves 6 km, what is the direction in which he is now moving?

- a) North
- b) West
- c) East
- d) South

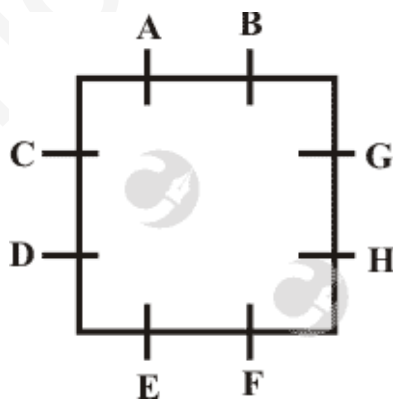
Q15. Mohan starts from point A and walks 1 km towards south, turns left and walks 1 km. Then he turns left again and walks 1 km. Now he is facing

- a) North
- b) West
- c) East
- d) South-west

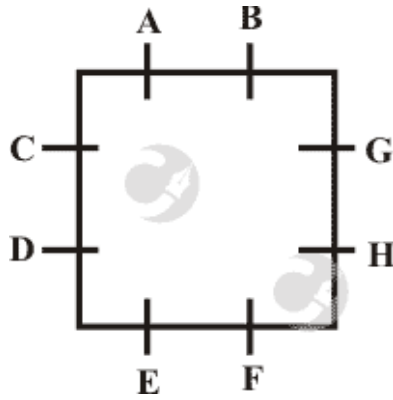
[Read More direction distance test Question and Answers »](#)

Answers to the above questions :

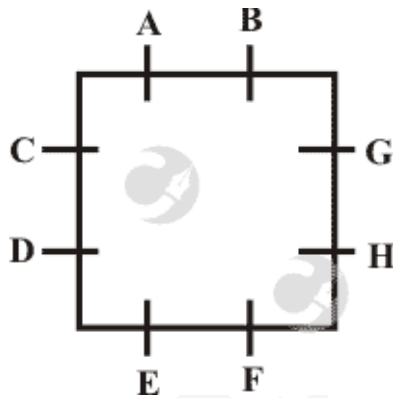
Q1. Answer: (a)



Q2. Answer: (d)



Q3. Answer: (b)



5000+ VERBAL REASONING TOPIC WISE MCQ QUESTION BANK WITH SOLVED ANSWERS & FREE PDF

[ANALOGY](#) [BLOOD RELATIONS](#) [CODING & DECODING](#) [CLASSIFICATION](#)

[VENN DIAGRAMS](#) [CLOCKS](#) [CALENDAR](#) [PUZZLES TEST](#)

[DIRECTION & DISTANCE SENSE TEST](#) [ASSERTION & REASON](#)

[CAUSE AND EFFECT](#) [SEATING ARRANGEMENTS](#) [STATEMENT & CONCLUSION](#)

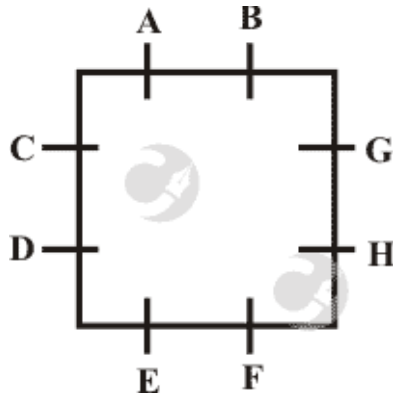
[SERIES COMPLETION](#) [STATEMENT & ARGUMENTS](#)

[STATEMENT & ASSUMPTIONS](#) [STATEMENT & COURSE OF ACTION](#)

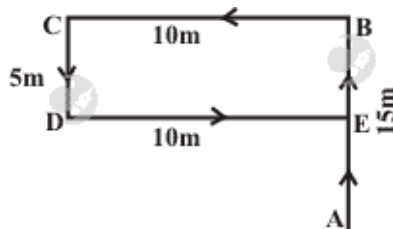
[PASSAGE & CONCLUSION](#) [SEQUENTIAL TEST](#) [MATHEMATICAL OPERATIONS](#)

[WORD FORMATION](#) [ALLIGATION & MIXTURES](#)

Q4. Answer: (c)

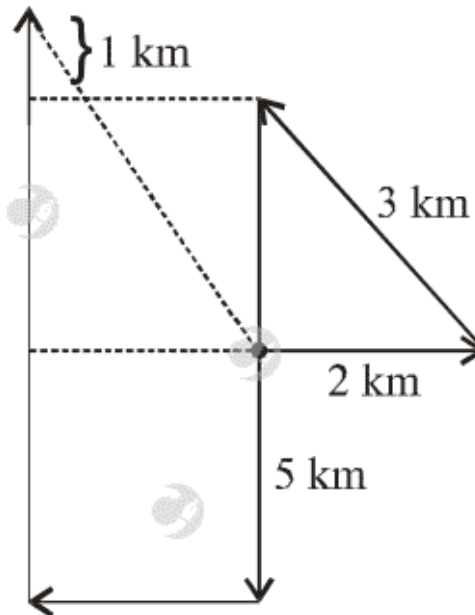


Q5. Answer: (a)



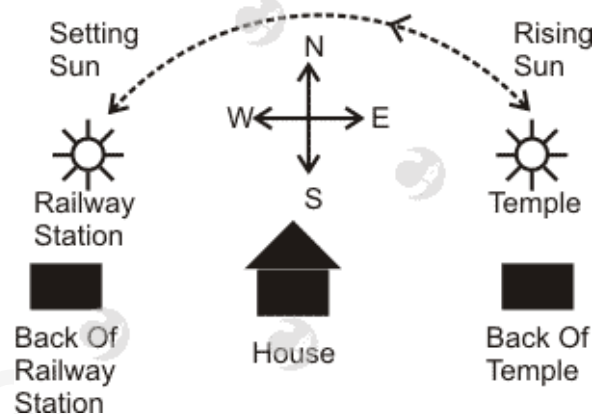
The movements of Lokesh are as shown in Figure (A to B, B to C, C to D and D to E).
Clearly, his final position is E which is to the North of his house at A.

Q6. Answer: (a)



Now Roy is in North-West direction from the starting point.

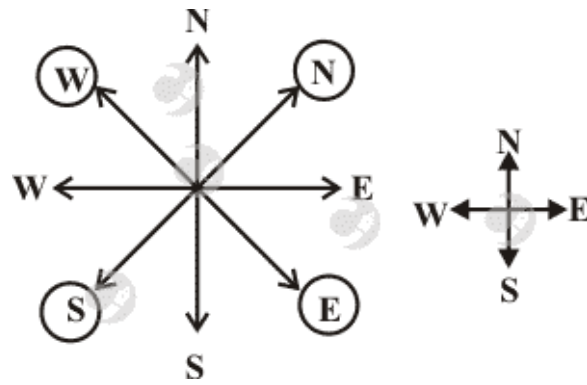
Q7. Answer: (a)



Thus, temple is in east direction with respect to railway station.

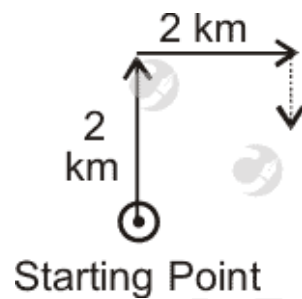
Q8. Answer: (c)

According to question



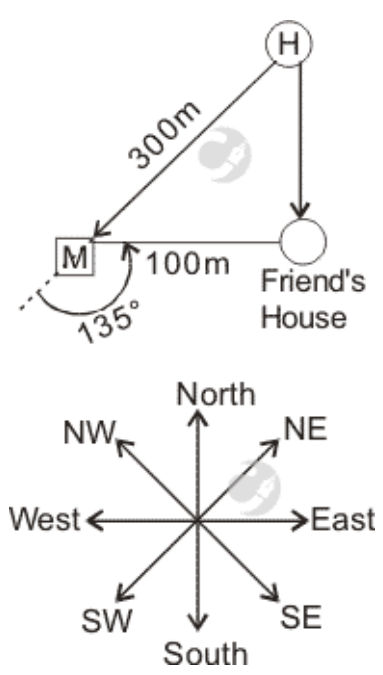
Now North direction is West-North or North-West.

Q9. Answer: (a)



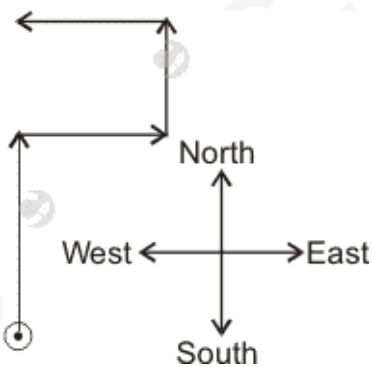
Now Seeta is facing towards south.

Q10. Answer: (c)

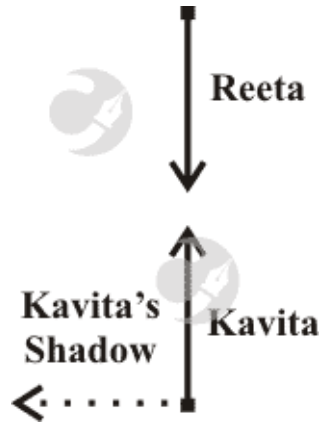


It is clear from the diagram that the house of Rahim is to the north of the house of his friend.

Q11. Answer: (d)



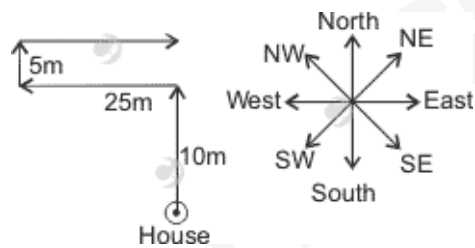
Q12. Answer: (d)



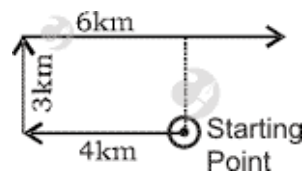
In morning, sun rises in the east and so any shadow falls towards the west. Now, Kavita's shadow falls to the right of Reeta.

Hence, Reeta is facing the South and Kavita is facing North.

Q13. Answer: (b)

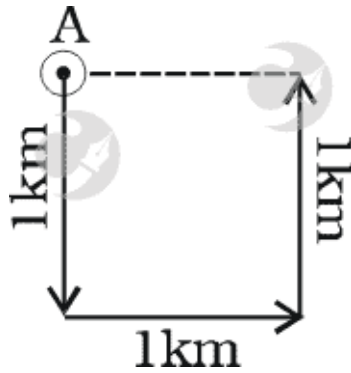


Q14. Answer: (c)



It is clear from the diagram he is moving towards east.

Q15. Answer: (a)



It is clear from the diagram that Mohan is facing towards North.

On our site **Careerions.com**, You can find all the content you need to prepare for any kind of exam like. **Verbal Reasoning, Non-Verbal Reasoning, Aptitude, English, Computer, History, Polity, Economy, Geography, General Science, General Awareness** & So on. Make use of our expert-curated content to get an edge over your competition and prepare for your exams effectively.

Practice with our **Free Practice MCQs, Mock Tests Series, Online Quiz** and get an idea of the real exam environment. Keep track of your progress with our detailed performance reports. They are perfect for competitive exam preparation, as well as for brushing up on basic & fundamental knowledge. The questions are updated regularly to keep up with the changing syllabuses.